


数学一年级下册第一单元

逛公园——20 以内的退位减法

题号	一	二	三	四	总分
得分					

一 小小知识窗。(32分)

1.  遮住的是几?(6分)

$15 - 8 = \text{apple}$

$14 - 6 = \text{apple}$


$12 - \text{apple} = 7$

$16 - \text{apple} = 9$

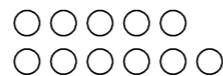
$11 - \text{apple} = 6$

$17 - \text{apple} = 9$

2. 圈一圈,算一算。(6分)



$15 - 7 = \square$



$11 - 8 = \square$

3. 我会填“+”或“-”。(6分)

$6 \bigcirc 8 = 14$

$14 \bigcirc 5 = 9$

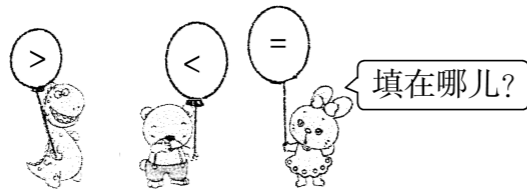
$12 \bigcirc 7 = 5$

$19 \bigcirc 9 = 10$

$11 \bigcirc 2 = 9$

$3 \bigcirc 9 = 12$

4. 轻松比大小。(6分)



$8 \bigcirc 14 - 5$

$16 - 7 \bigcirc 10$

$13 - 8 \bigcirc 15 - 9$

$12 - 9 \bigcirc 4$

$11 \bigcirc 11 - 3$

$18 - 9 \bigcirc 15 - 6$

5. 算一算,填一填。(8分)

物品	原有	借出	还剩
	12 根	3 根	() 根
	11 个	() 个	4 个
	13 个	5 个	() 个
	14 个	() 个	5 个

二 计算园地。(20分)

1. 我会算。(12分)

$13 - 7 =$

$14 - 8 =$

$12 - 9 =$

$15 - 9 =$

$16 - 9 =$

$14 - 9 =$

$12 - 6 =$

$12 - 3 =$

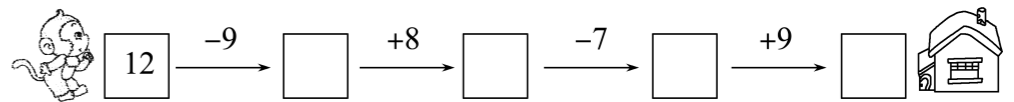
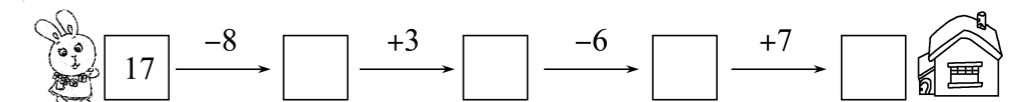
$14 - 6 =$

$13 - 5 =$

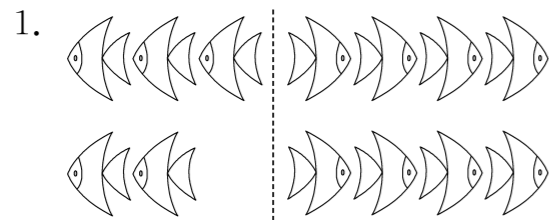
$16 - 7 =$

$13 - 6 =$

2. 送小动物回家。(8分)

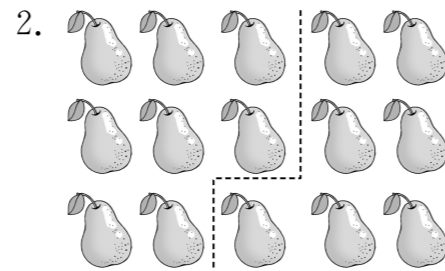


三 看图列式计算。(12分)




$13 - \square = \square$

$13 - \square = \square$



$15 - \square = \square$

$15 - \square = \square$



13个


$\square - \square = \square$ (个)



$\square - \square = \square$ (只)

四 解决问题。(36分)

1. 还剩下多少只小鸟?(6分)



$\square \bigcirc \square = \square$ (只)

2. 小小超市购进了一些水果,如下表。(12分)

14个	9个	16个	7个

(1) 桃比梨多多少个?

$\square \bigcirc \square = \square$ (个)

(2) 西瓜比苹果少几个?

$\square \bigcirc \square = \square$ (个)


(3) 你还能提出什么问题?

3. 小青蛙再吃几只虫子,就和大青蛙吃的一样多?(6分)



$\square \bigcirc \square = \square$ (只)

4. 学校图书室有15本《数学故事》。(6分)



小女孩借走了几本《数学故事》?

$\square \bigcirc \square = \square$ (本)

5. 停车场上的汽车先开走了6辆,又开走了5辆,一共开走了多少辆?(6分)

$\square \bigcirc \square = \square$ (辆)